

Part 2



Homework

Homework #1

According to the plan how many exits have been Provided from the Ground Floor Part "A" 1A02 Lobby?

- A. One
- B. Two
- C. Three
- D. Four

Homework #2

According to the plan what is the clear width of the 2nd. floor stair landing in the direction of door swing?

- A. 44"
- B. 3'-10"
- C. 5'-9"
- D. None of the above



Resolution

Homework #1

According to the plan how many exits have been Provided from the Ground Floor Part "A" 1A02 Lobby?

- A. One
- B. Two
- C. Three
- D. Four

Homework #2

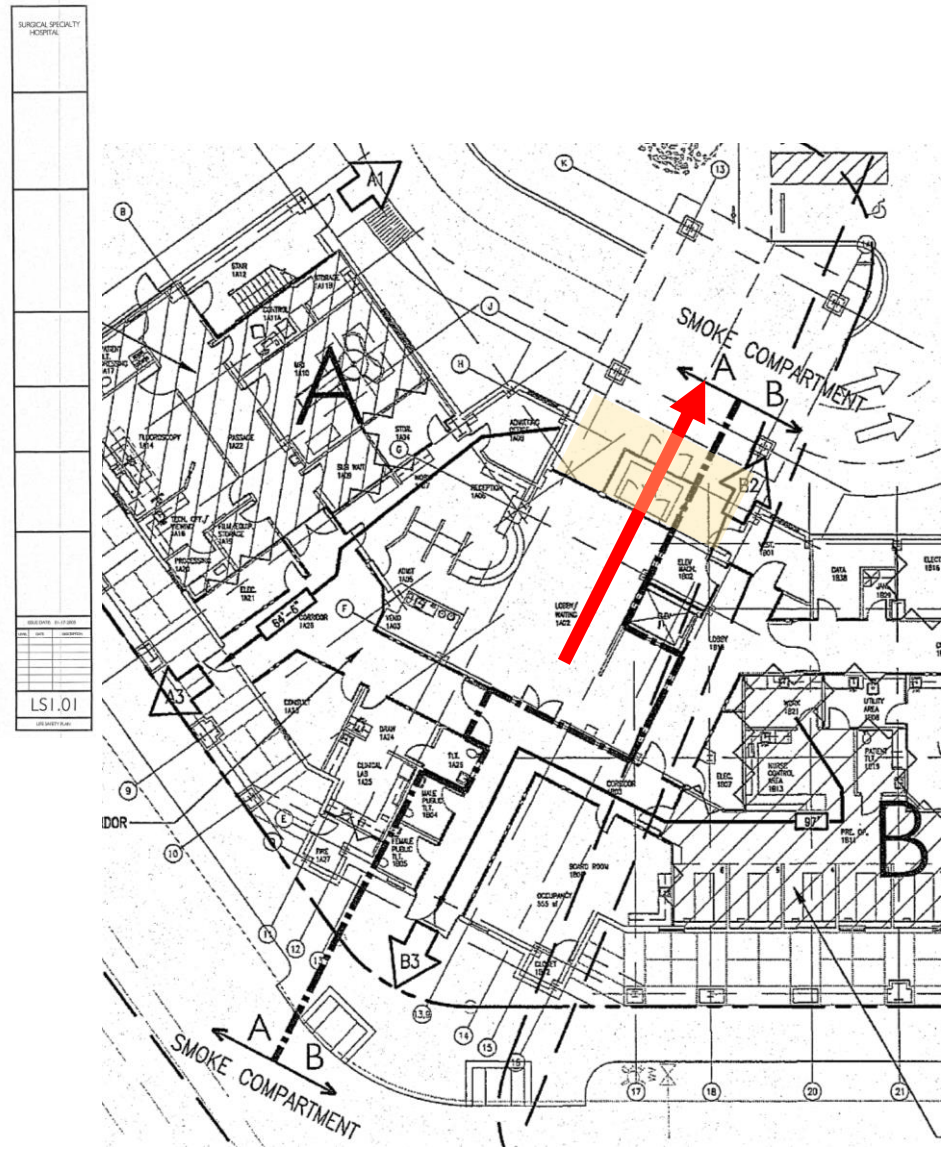
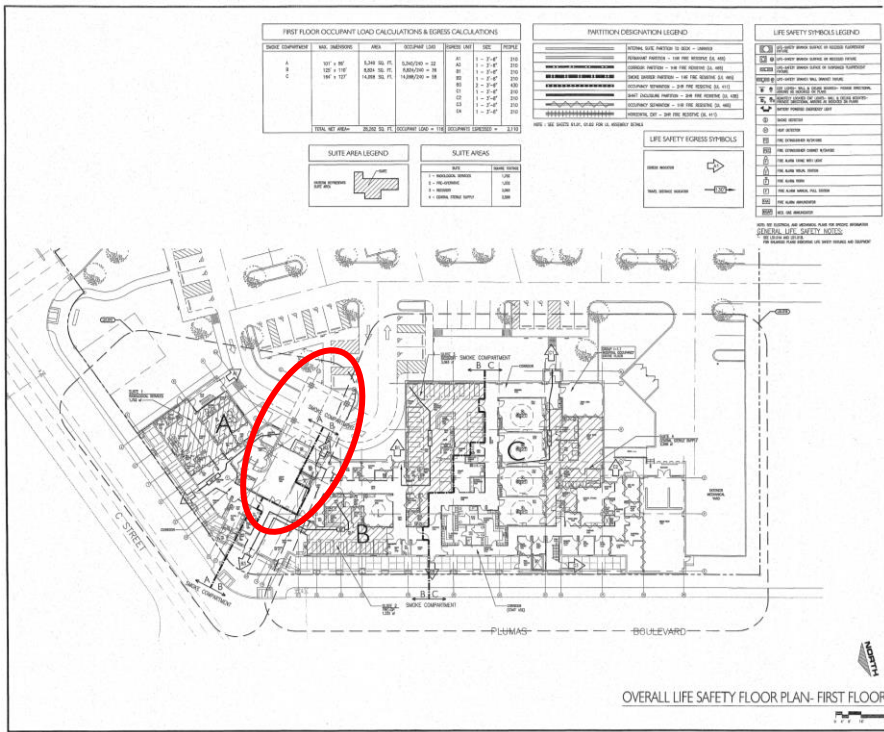
According to the plan what is the clear width of the 2nd. floor stair landing in the direction of door swing?

- A. 44"
- B. 3'-10"
- C. 5'-9"
- D. None of the above



According to the plan how many exits have been Provided from the Ground Floor Part “A” 1A02 Lobby?

- A. One
- B. Two
- C. Three
- D. Four



Look for the door swing...

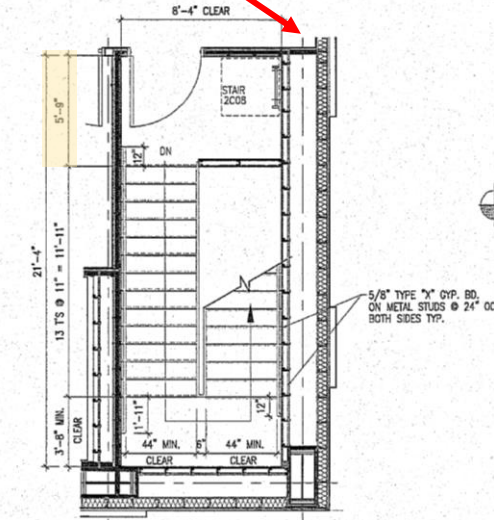
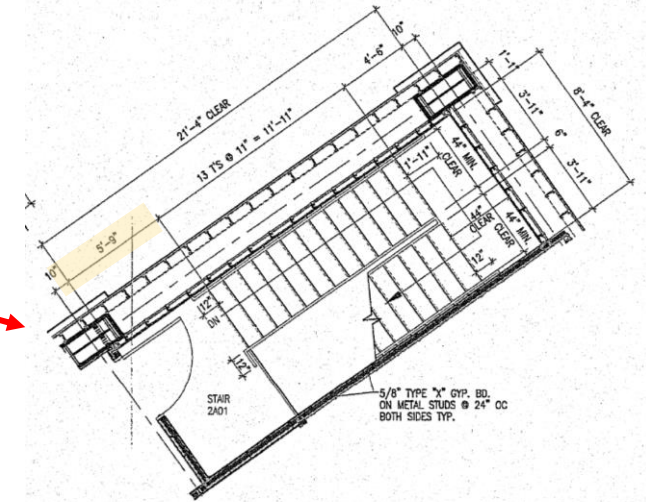
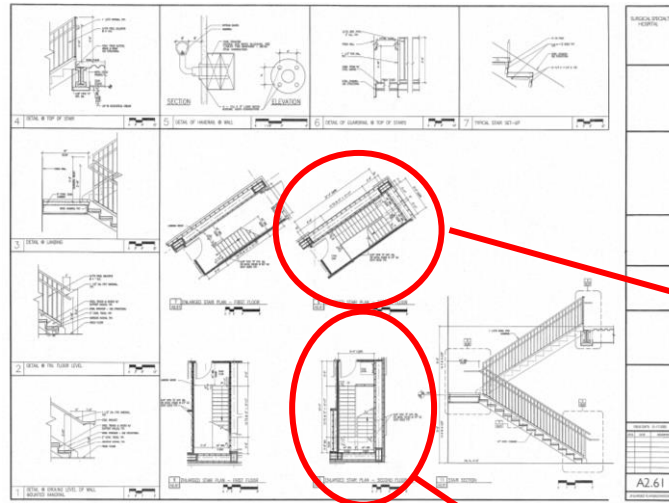


According to the plan what is the clear width of the 2nd. floor stair landing in the direction of door swing?

- A. 44"
- B. 3'-10"
- C. 5'-9"
- D. None of the above



Look at the Stairs enlarged plans in A2.61



Q&A

